


## Answer sheet 1


### I. Choose the correct answer.

1. Choose the numerical representation for the following.



- a. 173
- b. 137
- c. **183**
- d. 207

2. What number does the following figure represent?

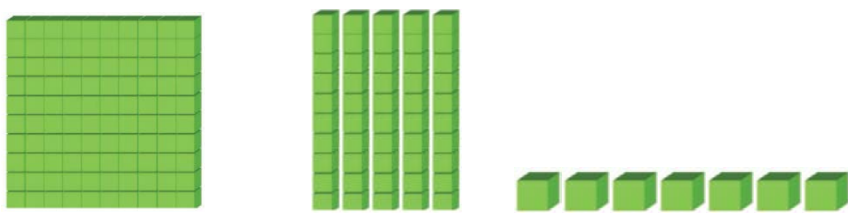



- a. One hundred and thirteen
- b. **One hundred and thirty-three**
- c. One hundred and twenty-two
- d. None of the above


3. What is the word representation of 056?


- a. One hundred and fifty-six
- b. One hundred and fifteen-six
- c. Five-sixty
- d. **Fifty-six**

4. Choose the correct representation for 178.

a. 

b. 


c. 

d.  

5. What is the numerical representation for One hundred and thirty-four?

- a. 143  
 b. **134**  
 c. 144  
 d. Both a and b


## II. Fill in the blanks.



The place value of 2 in the number represented by the figure is 20.

2. The face value at Ones place in the number '162' is 2.

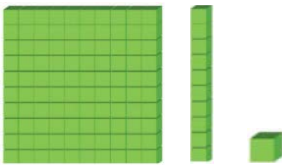
3. The face value of the tens place in the '198' is 9.

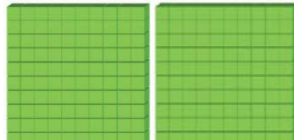


In the numerical representation of the given figure, digit 4 is at the tens place and 3 is at the ones place.

5. The number '088' has 0 hundreds.

### III. Match the following.

Column A
1. One hundred and seventy-nine
2. 163
3. Two hundred
4. 
5. 139

Column B
a. 111
b. One hundred and thirty-nine
c. 179
d. One hundred and sixty-three
e. 

1-c

2-d

4-a

5-b