

Answer sheet 1

- I. Categorise the different given examples under the correct property of air it shows by colouring it with the given colour codes.

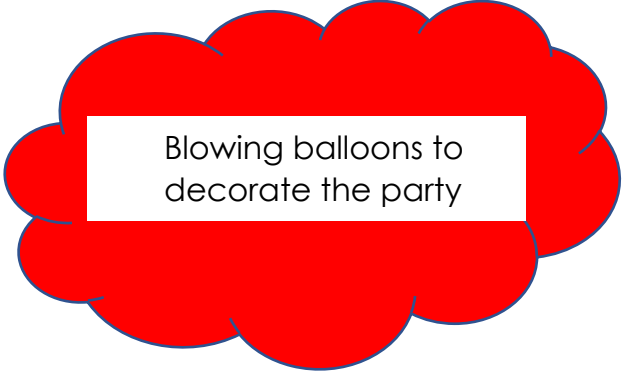
Air has weight.

Air occupies space.

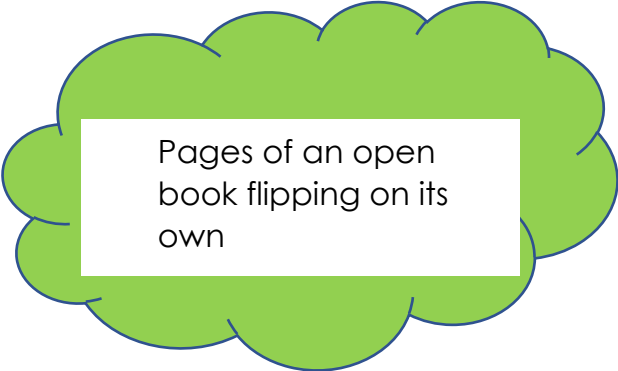
Air moves and pushes things.




Curtains of a window flying



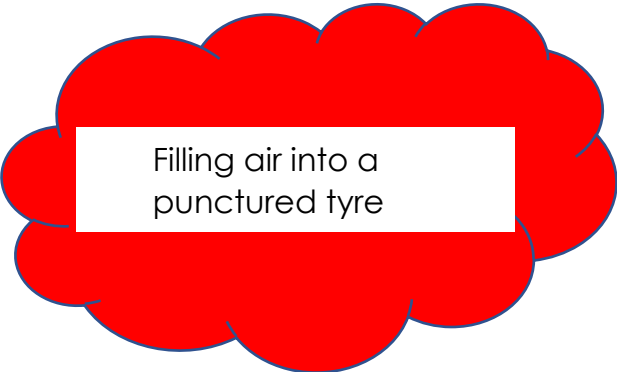
Blowing balloons to decorate the party



Pages of an open book flipping on its own



The clothes on the clothesline swaying



Filling air into a punctured tyre

II. Match the following.

Column A
1. Air moves and pushes things. (C)
2. Air occupies space. (b)
3. Air has weight. (a)

Column B
a. A ball filled with air is heavier.
b. The balloon grows bigger when air is blown into it.
c. The branches of a tree swaying.