


Answer sheet 1

I. Choose the correct answer.

1. Identify the type of lines in red colour in the given figure?



- a. Curved lines
- b. Horizontal lines
- c. Slant lines
- d. **Vertical lines**

2. Identify the type of line in red colour.




- a. Vertical lines
- b. **Slant lines**
- c. Horizontal lines
- d. None of the above

3. Which of the following objects contains slant lines?



a.



b.



4. Which of the following objects does not have any horizontal lines?


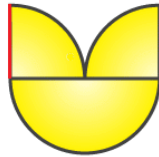



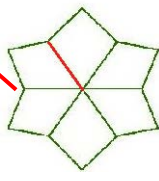

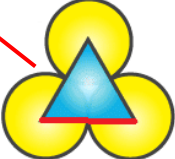

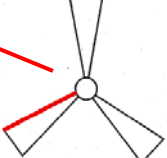


5. Identify the types of line in yellow and blue colour respectively.



- Slant lines and Vertical lines**
- Horizontal lines and Slant lines
- Vertical lines and Horizontal lines
- Curved lines and Vertical lines

II. Match the following.

Column A	Column B
1. 	a. 
2. 	b. 
3. 	c. 
4. 	d. 
5. 	e. 

III. Answer in short.

1. Join the dots given in the figure and draw the lines in your notebook using a ruler. Do not draw the whole figure.



2. Join the dots given in the figure and draw the line your notebook using a ruler. Do not draw the whole figure.



3. Draw the figure shown below using a ruler.



4. Draw a shape using two slant lines and two horizontal lines.
5. Draw the shape given below in your notebook using a ruler.

