


## Worksheet 1


### I. Choose the correct answer.

1. Choose the numerical representation for the following.



- a. 173
- b. 137
- c. 183
- d. 207

2. What number does the following figure represent?

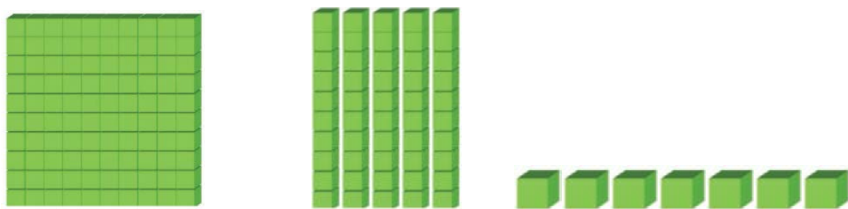



- a. One hundred and thirteen
- b. One hundred and thirty-three
- c. One hundred and twenty-two
- d. None of the above


3. What is the word representation of 056?


- a. One hundred and fifty-six
- b. One hundred and fifteen-six
- c. Five-sixty
- d. Fifty-six

4. Choose the correct representation for 178.

a. 

b. 


c. 

d. 

5. What is the numerical representation for One hundred and thirty-four?

- a. 143
- b. 134
- c. 144
- d. Both a and b


**II. Fill in the blanks.**

1. 

The place value of 2 in the number represented by the figure is \_\_\_\_\_.

2. The face value at Ones place in the number '162' is \_\_\_\_\_.

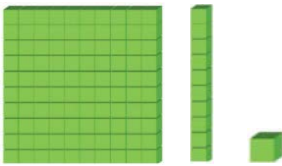
3. The \_\_\_\_\_ of the tens place in '198' is 9.



4. In the numerical representation of the given figure, digit 4 is at the \_\_\_\_\_ place and 3 is at the \_\_\_\_\_ place.

5. The number '088' has \_\_\_\_\_ hundreds.

### III. Match the following.

Column A
1. One hundred and seventy-nine
2. 163
3. Two hundred
4. 
5. 139

Column B
a.           111
b.       One hundred and thirty-nine
c.       179
d.       One hundred and sixty-three
e. 