


Worksheet 1

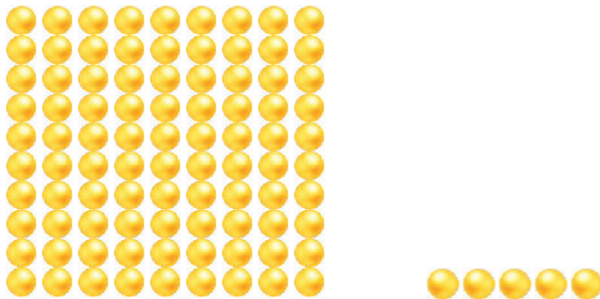
I. Choose the correct answer.

1. Which of the following number do these beads represent?



- a. 73
- b. 37**
- c. 83
- d. 17

2. Which of the following number do these beads represent?



- a. Ninety-four
- b. Eighty-five
- c. Ninety-five**
- d. None of the above

3. Which of the following number do these beads represent?



- a. Ten-three
- b. Twenty
- c. Thirty
- d. Thirteen**

4. Which of the following represent the number 62?





5. Which of the following represent the number 84?

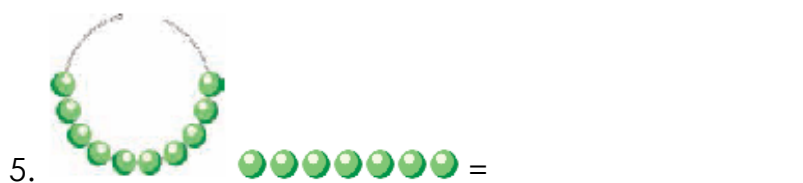
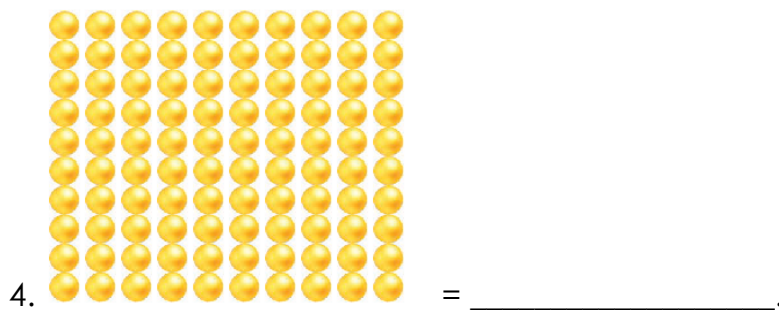
- a. **Eighty-four**
- b. Eight-four
- c. Forty-eight
- d. Both a and b

II. Fill in the blanks.

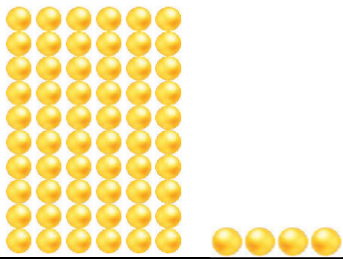
1. 5, _____, 25 _____, 45, 55.



3. _____, 44, _____, 64, _____, 84.



III. Match the following.

Column A
1. 
2. Forty-one
3. 90
4. Seventy-six
5. 82

Column B
a. Value of ones place = 2
b. Value of tens place = 60
c. $70 + 6$
d. $40 + 1$
e. Value of ones place = 0

1-b

2-d

3-e

4-c

5-a