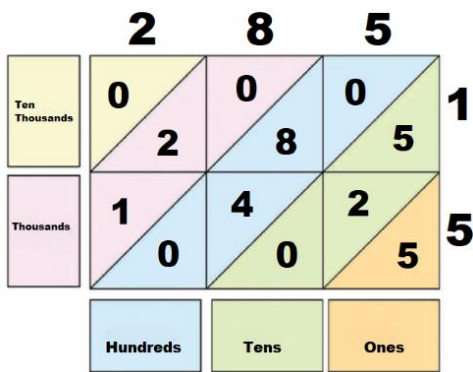
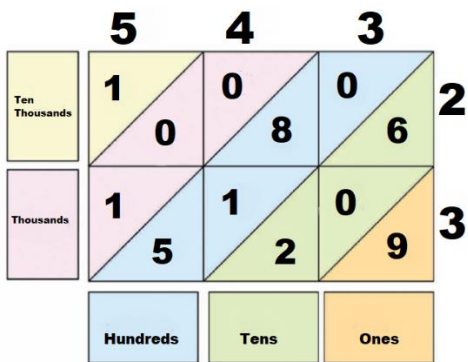


## Worksheet 1

### I. Fill in the blanks.

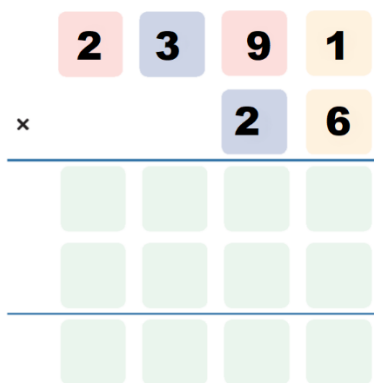


1.  $285 \times 15 = \underline{\hspace{2cm}}$ .



2.  $543 \times 23 = \underline{\hspace{2cm}}$ .

3.  $654 \times 44 = \underline{\hspace{2cm}}$ .



4.  $2,391 \times 26 = \underline{\hspace{2cm}}$ .

5.  $849 \times 21 =$  \_\_\_\_\_.

**II. Match the following.**

Column A	
1.	$3,679 \times 12$
2.	$7,287 \times 4$
3.	$278 \times 39$
4.	$4,738 \times 2$
5.	$588 \times 7$

Column B	
a.	10,842
b.	29,148
c.	9,476
d.	4,116
e.	44,148